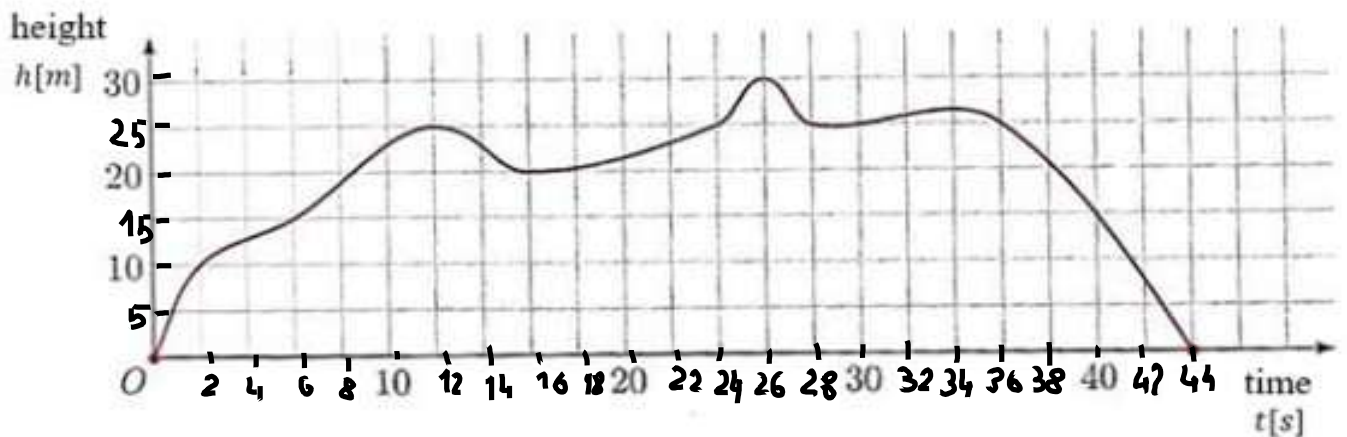


Name and surname.....Class.....

POSTTEST

Task 1.

The graph shows changes in the height of a flying drone above the ground during its flight.



Answer the following questions based on the graph.

- How long did the flight last?
- What was the maximum height reached by the drone?.....
- Does the graph show **the** drone's flight **path**?

Underline the correct answer and then justify it.

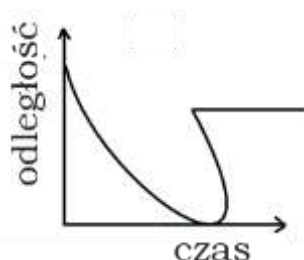
☐ YES ☐ NO

because.....

Task 2.

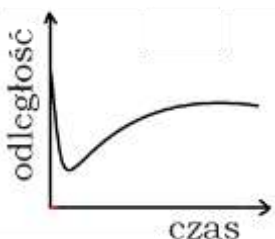
Which of the graphs could represent **the distance of the ball from the goal at a certain point in time during the game?**

Select (underline) the correct answer YES or NO, and then write why you think so.



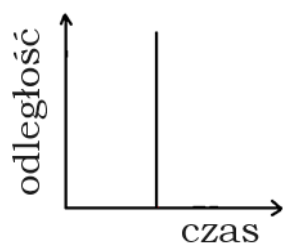
☐ YES ☐ NO because:

because:



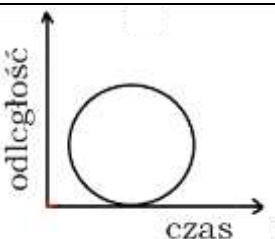
☐ YES ☐ NO

because:



☐ YES ☐ NO

because:



☐ YES ☐ NO

because: